



Име: \_\_\_\_\_




## Собирање до 20

Пресметај и нацртај соодветен број на точки на коцките за да биде точно.



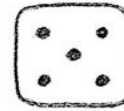
$$4 + \underline{2} = 6$$



$$3 + \underline{\quad} = 4$$




$$6 + \underline{\quad} = 8$$



$$5 + \underline{\quad} = 10$$

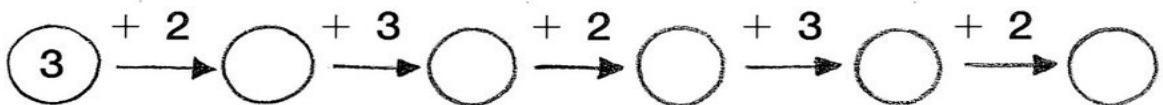
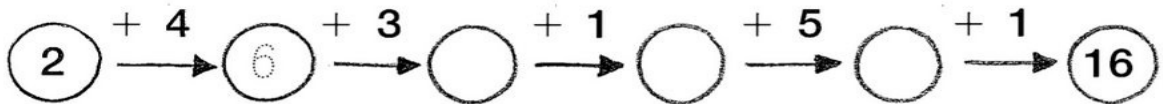


$$1 + \underline{\quad} = 6$$



$$6 + \underline{\quad} = 11$$

Пополни ги низите.



Пресметај!

$$5 + \underline{3} = 8$$

$$3 + \underline{\quad} = 9$$

$$6 + \underline{\quad} = 7$$

$$8 + \underline{\quad} = 11$$

$$4 + \underline{\quad} = 6$$

$$9 + \underline{\quad} = 10$$