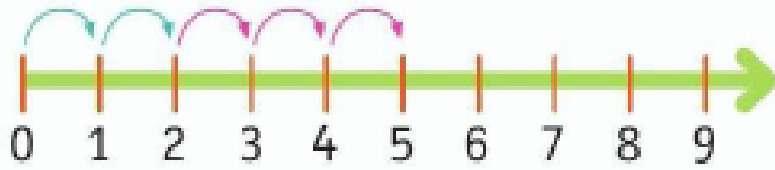


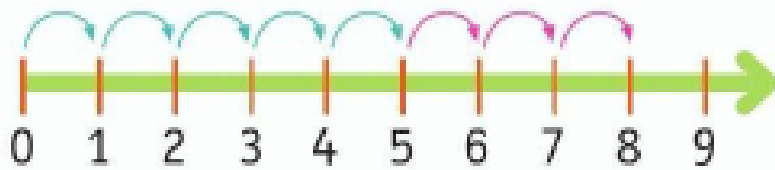
Име: _____



Собирање на бројна оска



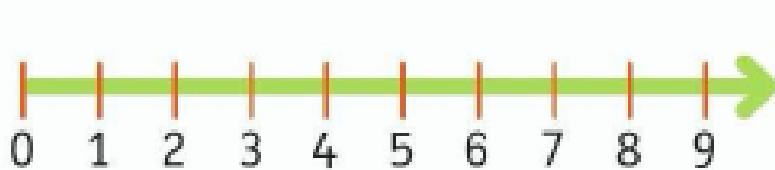
$$2 + 3 = \square$$



$$\square + \square = \square$$



$$\square + \square = \square$$



$$4 + 3 = \square$$



$$1 + 5 = \square$$



$$3 + 5 + 1 = \square$$



$$\square + \square = \square$$