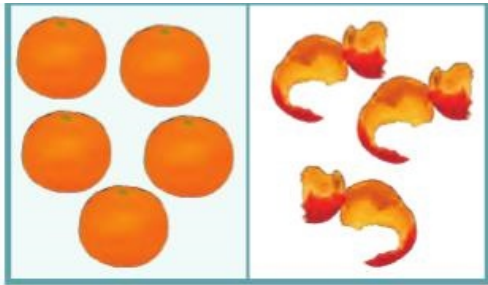





# Формирање разлики


Пресметај



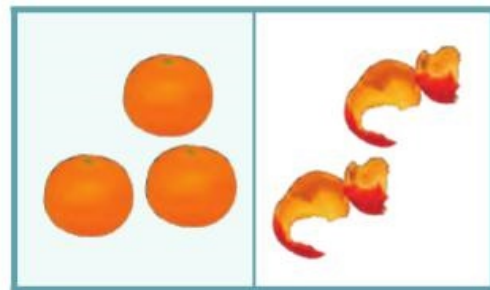
$$5 - 3 = \underline{2}$$



$$3 - 1 = \underline{\quad}$$




$$5 - \underline{\quad} = \underline{\quad}$$



$$\underline{\quad} - 2 = \underline{\quad}$$



$$\underline{\quad} - 2 = \underline{\quad}$$



$$4 - \underline{\quad} = \underline{\quad}$$



$$\underline{\quad} - \underline{\quad} = \underline{\quad}$$



$$\underline{\quad} - \underline{\quad} = \underline{\quad}$$