

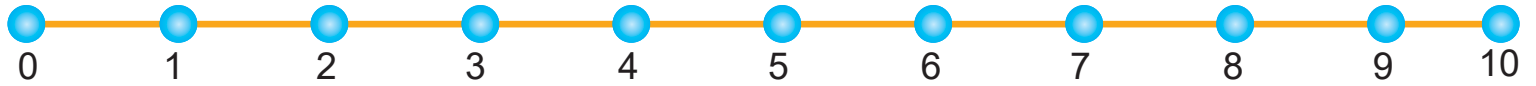


Одземање со 1- броиме наназад

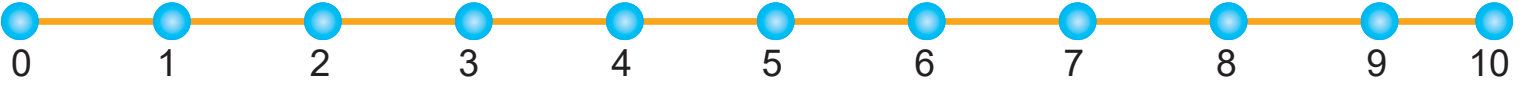
1
ОДД

1 Реши ги задачите со броење наназад по 1 .

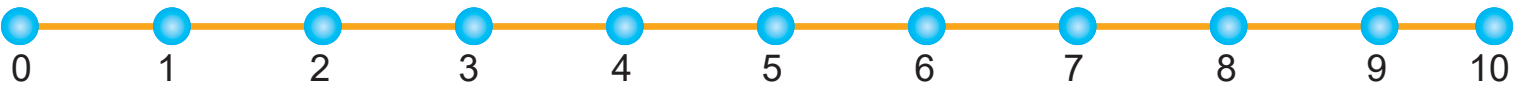
$10 - 1 = \dots\dots\dots$



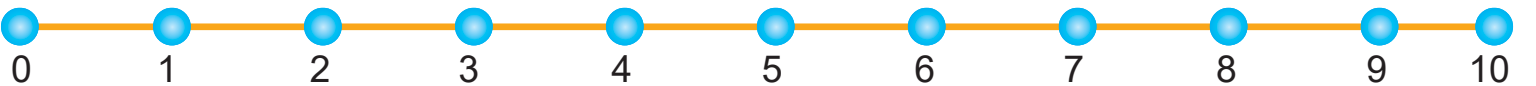
$8 - 1 = \dots\dots\dots$



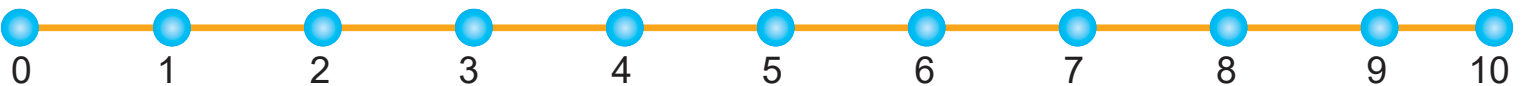
$7 - 1 = \dots\dots\dots$



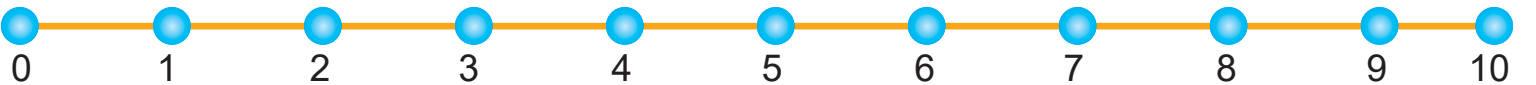
$6 - 1 = \dots\dots\dots$



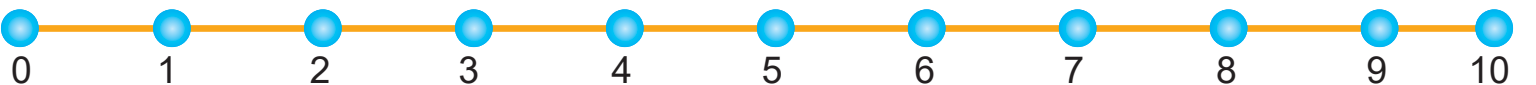
$4 - 1 = \dots\dots\dots$



$5 - 1 = \dots\dots\dots$



$4 - 1 = \dots\dots\dots$



$3 - 1 = \dots\dots\dots$

