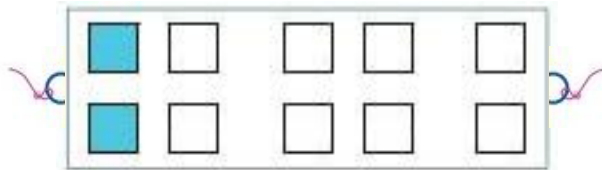




# Равенства со собирање и одземање

1 Поврзи ги равенствата што одговараат на сликите (можни се повеќе решенија).

8 - 5

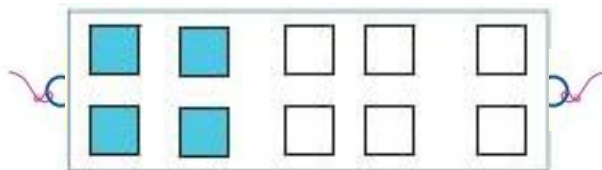


5 + 5

10 - 8

6 + 4

10 - 4

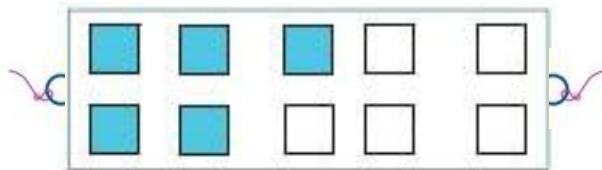


3 + 5

8 - 6

2 + 6

10 - 5

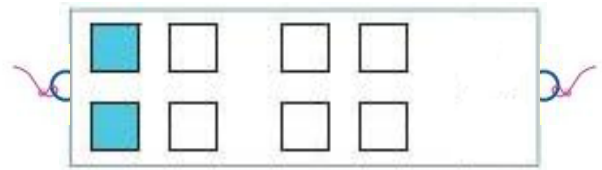


2 + 8

8 - 2

6 + 2

10 - 6

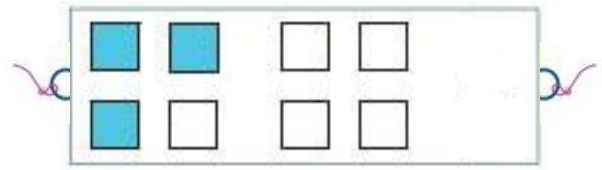


8 + 2

8 - 3

5 + 3

10 - 2



4 + 6

